

Math 10350 – Exam 03 Review

1. The statement: “ $f(x)$ is increasing on $a < x < b$.” is the same as:

1a. “ $f'(x)$ is _____ on $a < x < b$.”

2. The statement: “ $f'(x)$ is negative on $a < x < b$.” is the same as:

2a. “ $f(x)$ is _____ on $a < x < b$.”

3. The statement: “The graph of $f(x)$ is concave up on $a < x < b$.” is the same as:

3a. “ $f''(x)$ is _____ on $a < x < b$.” is the same as:

3b. “ $f'(x)$ is _____ on $a < x < b$.”

4. The statement: “ $f'(x)$ is decreasing on $a < x < b$.” is the same as:

4a. “ $f''(x)$ is _____ on $a < x < b$.” is the same as:

4b. “The graph of $f(x)$ is _____ on $a < x < b$.”

1. Let $f(x)$ is The figure below is the graph of the **derivative** $f'(x)$ of $f(x)$ for $-8 < x < 4$. Find all intervals on which **the graph of $f(x)$** is concave up?

(i) Find all values of x in $(-8, 4)$ for which $f(x)$ is increasing.

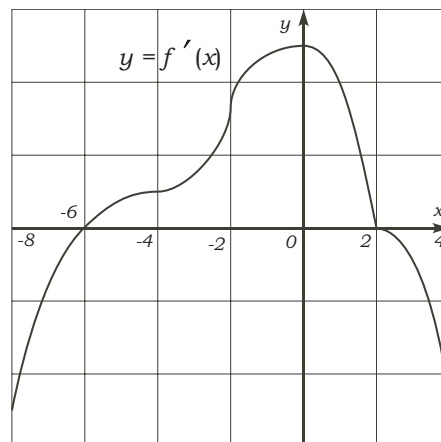
(ii) Find all values of x in $(-8, 4)$ for which $f(x)$ is decreasing.

(iii) Find the critical points of $f(x)$ in $(-8, 4)$. Are these local maximums or minimums?

(iv) Find all intervals on which **the graph of $f(x)$** is concave up in $(-8, 4)$.

(v) Find all intervals on which **the graph of $f(x)$** is concave down in $(-8, 4)$.

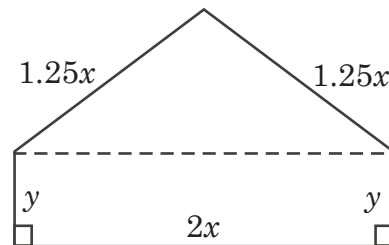
(vi) Find all values of x in $(-8, 4)$ for which $f(x)$ has an inflection point.



2. Find all vertical and horizontal asymptotes of the following functions:

(a) $f(x) = \frac{x^2 - 3x - 2}{x^3 - 4x}$; (b) $g(x) = \frac{2x^4 + 3x^2 + x + 1}{\sqrt{x^8 - 1}}$; (c) $h(x) = \frac{e^{3x} + e^x - 3}{3e^{3x} + 4e^x + 5}$

3. An landscaper has 30 ft of fencing and wishes to enclosed a five sided figure as shown. Find an expression for the area A enclosed in terms of x . Find the values of x and y that maximizes the area A . What is the maximum area that can be enclosed? (Ans: $x = 4$ ft, $y = 6$ ft, $\max A = 60\text{ft}^2$)



4. A rectangular tank with an open top must have a volume of 162 cubic meters. The base costs 3 hundred dollars per square meter and the side costs 2 hundred dollars per square meters. Let C be the cost of making such a tank. (a) If the square base is $x \times x$, write down the cost function $C(x)$ in terms of the x . (b) Write down the range of the possible values of x . (c) Using calculus, find the dimensions of the tank that minimizes the cost.

5. Let $f(x) = x + \frac{4}{x}$

(a) The derivative of $f(x)$, $f'(x) =$ _____.

(b) Find all critical points of $f(x)$.

(c) By classifying the critical points in Part (b) using first derivative test OR OTHERWISE, fill in the blanks below:

(i) Local maximum occurs at $x =$ _____ Coordinates = _____ (Fill in NA if none).

(ii) Local minimum occurs at $x =$ _____ Coordinates = _____ (Fill in NA if none).

(iii) The function $f(x)$ is **increasing** on the interval(s): _____

(iv) The function $f(x)$ is **decreasing** on the interval(s): _____

(d) Find all values of x for which the function is (a) concave up; (b) concave down. Give the coordinates of the inflection points.

(e) Draw the graph of $y = x + \frac{4}{x}$ marking clearly all important features.

6. Find the absolute maximum value and absolute minimum value of the function

$$f(x) = 2x^3 - 3x^2 - 12x$$

on the interval $-2 \leq x \leq 1$, and say where they occur.

7. Find the value of the following limits:

(a) $\lim_{x \rightarrow 0^+} \left(1 + \frac{1}{x^2}\right)^x$

(b) $\lim_{x \rightarrow \infty} \frac{e^x - 1}{\sin x}$

(c) $\lim_{x \rightarrow \pi/2} (\tan x - \sec x)$

8. Find the value(s) of c satisfying the conclusion of the MVT for function $f(x) = x \ln x$ on the interval $[1, 2]$.

9. Draw a picture to illustrate MVT for the function $f(x) = \sqrt{x-4}$ on the interval $[5, 13]$.

10. Draw a picture to illustrate Rolle's theorem for the function $f(x) = \cos 2x$ on the interval $[-\pi/4, \pi/4]$.

11. (4.6/Q20) Rice production requires both labor and capital investment in equipment and land. Suppose that if x per acre are invested in labor and y dollars per acre are invested in equipment and land, then the yield P of rice per acre is given by the formula $P = 100\sqrt{x} + 150\sqrt{y}$. If a farmer invests \$40/acre, how should he divide the \$40 between labor and capital investment in order to maximize the amount of rice produced.

12. Describe the monotonicity and concavity of the function $f(x) = 3x^5 - 20x^3$. State all critical points and classify them. Find all inflection points of $f(x)$.

Math 10350 – Exam 03 Review Answers

1. (i) $(-6, 2)$; (ii) $(-8, -6) \cup (2, 4)$; (iii) $x = -6$ local min., $x = 2$ local max; (iv) $(-8, 0)$; (v) $(0, 2) \cup (2, 4)$, (vi) Inflection point at $x = 0$ but not at $x = 2$.

2. (a) $f(x) = \frac{x^2 - 3x + 2}{x^3 - 4x} = \frac{(x-1)(x-2)}{x(x-2)(x+2)}$ so vertical asymptotes are $x = -2$, and $x = 0$. Horizontal asymptote is $y = 0$ because $\lim_{x \rightarrow -\infty} f(x) = 0 = \lim_{x \rightarrow \infty} f(x)$.

(b) $g(x) = \frac{2x^4 + 3x^3 + x + 1}{\sqrt{x^8 - 1}} = \frac{2x^4 + 3x^3 + x + 1}{\sqrt{(x^4 + 1)(x^2 + 1)(x - 1)(x + 1)}}$. Vertical asymptotes are $x = -1$ and $x = 1$.
 $\lim_{x \rightarrow -\infty} g(x) = 2 = \lim_{x \rightarrow \infty} g(x)$ so horizontal asymptote is $y = 2$.

(c) $h(x) = \frac{e^{3x} + e^x - 3}{3e^{3x} + 4e^x + 5}$. No vertical asymptotes. $\lim_{x \rightarrow -\infty} h(x) = -3/5$ and $\lim_{x \rightarrow \infty} h(x) = 1/3$ so horizontal asymptotes are $y = -3/5$ and $y = 1/3$.

3. $x = 4\text{ft}$, $y = 6\text{ft}$, $\max A = 60\text{ft}^2$

4. (a) $C(x) = 3x^2 + \frac{1296}{x}$; (b) $0 < x < \infty$; (c) Global min at $x = 6$, $C(6) = 324$ hundreds of dollar.

5. (a) $f'(x) = 1 - \frac{4}{x^2}$; (b) $x = -2, 2$.

(c) (i) Local maximum occurs at $x = -2$ Coordinates = $(-2, -4)$.

(ii) Local minimum occurs at $x = 2$ Coordinates = $(2, 4)$.

(iii) The function $f(x)$ is **increasing** on the interval(s): $(-\infty, -2) \cup (2, \infty)$

(iv) The function $f(x)$ is **decreasing** on the interval(s): $(-2, 0) \cup (0, 2)$

(d) (a) concave up for $(0, \infty)$; (b) concave down for $(-\infty, 0)$. No inflection points.

(e) Yours!!!

6. End-points: $f(-2) = -4$ and $f(1) = -13$ (Absolute min). Critical point: $f(-1) = 7$ (Absolute max).

7. Find the value of the following limits:

(a) $\lim_{x \rightarrow 0^+} \left(1 + \frac{1}{x^2}\right)^x = 1$ (b) $\lim_{x \rightarrow \infty} \frac{e^x - 1}{\sin x}$ does not exist. (c) $\lim_{x \rightarrow \pi/2} (\tan x - \sec x) = 0$

8. $c = e^{2 \ln 2 - 1}$. 9. $c = 8$ 10. $c = 0$.

11. $P(x) = 100\sqrt{x} + 150\sqrt{40 - x}$ where $0 \leq x \leq 40$. End-points: $P(0) = 300\sqrt{10}$ and $P(40) = 200\sqrt{10}$.

Critical point:

$P(160/13) = 100\sqrt{160/13} + 150\sqrt{360/13} = 400\sqrt{10/13} + 900\sqrt{10/13} = 1300\sqrt{10/13} = 100\sqrt{130}$ (Global max).

12. Increasing on $(-\infty, -2) \cup (2, \infty)$. Decreasing on $(-2, 0) \cup (0, 2)$.

Concave up on $(-\sqrt{2}, 0) \cup (\sqrt{2}, \infty)$. Concave down $(-\infty, -\sqrt{2}) \cup (0, \sqrt{2})$.

Math 10350: Calculus A
Exam III Sample
November 18, 2018

Name: _____

Class Time: _____

- The Honor Code is in effect for this examination. All work is to be your own.
- No calculators.
- The exam lasts for one hour and 15 minutes.
- Be sure that your name is on every page in case pages become detached.
- Be sure that you have all 11 pages of the test.

Sign the pledge. “On my honor, I have neither given nor received unauthorized aid on this Exam”:

Good Luck!

PLEASE MARK YOUR ANSWERS WITH AN X, not a circle!					
1.	<input type="checkbox"/> a	<input type="checkbox"/> b	<input type="checkbox"/> c	<input type="checkbox"/> d	<input type="checkbox"/> e
2.	<input type="checkbox"/> a	<input type="checkbox"/> b	<input type="checkbox"/> c	<input type="checkbox"/> d	<input type="checkbox"/> e
3.	<input type="checkbox"/> a	<input type="checkbox"/> b	<input type="checkbox"/> c	<input type="checkbox"/> d	<input type="checkbox"/> e
4.	<input type="checkbox"/> a	<input type="checkbox"/> b	<input type="checkbox"/> c	<input type="checkbox"/> d	<input type="checkbox"/> e
5.	<input type="checkbox"/> a	<input type="checkbox"/> b	<input type="checkbox"/> c	<input type="checkbox"/> d	<input type="checkbox"/> e
6.	<input type="checkbox"/> a	<input type="checkbox"/> b	<input type="checkbox"/> c	<input type="checkbox"/> d	<input type="checkbox"/> e
7.	<input type="checkbox"/> a	<input type="checkbox"/> b	<input type="checkbox"/> c	<input type="checkbox"/> d	<input type="checkbox"/> e
8.	<input type="checkbox"/> a	<input type="checkbox"/> b	<input type="checkbox"/> c	<input type="checkbox"/> d	<input type="checkbox"/> e
9.	<input type="checkbox"/> a	<input type="checkbox"/> b	<input type="checkbox"/> c	<input type="checkbox"/> d	<input type="checkbox"/> e
10.	<input type="checkbox"/> a	<input type="checkbox"/> b	<input type="checkbox"/> c	<input type="checkbox"/> d	<input type="checkbox"/> e
11.	<input type="checkbox"/> a	<input type="checkbox"/> b	<input type="checkbox"/> c	<input type="checkbox"/> d	<input type="checkbox"/> e
12.	<input type="checkbox"/> a	<input type="checkbox"/> b	<input type="checkbox"/> c	<input type="checkbox"/> d	<input type="checkbox"/> e

Please do NOT write in this box.

Multiple Choice _____

13. _____

14. _____

15. _____

16. _____

Total _____

Name: _____

Class Time: _____

Multiple Choice

1.(5 pts.) Which of the following statements is **TRUE** about the graph of

$$f(x) = 3x^{2/3} + 2x - 1?$$

(only one of them is true)

- (a) The graph of $f(x)$ is concave upward on the interval $(-\infty, -1) \cup (0, \infty)$ only.
- (b) The graph of $f(x)$ is concave downward on the interval $(-1, 0)$ only.
- (c) The graph of $f(x)$ is concave upward on the interval $(-1, 0)$ only.
- (d) The graph of $f(x)$ is concave upward on the intervals $(-\infty, 0)$ and $(0, \infty)$.
- (e) The graph of $f(x)$ is concave downward on the intervals $(-\infty, 0)$ and $(0, \infty)$.

2.(5 pts.) Find the value(s) of x at which the function $f(x) = 3x^5 - 20x^4$ has an inflection point.

- (a) $x = 0$ only.
- (b) $x = 4$ only.
- (c) $x = 0$ and $x = 16/3$ only.
- (d) $x = 0$ and $x = 4$ only.
- (e) $x = 16/3$ only.

Name: _____

Class Time: _____

3.(5 pts.) Find all horizontal asymptotes of the graph of $y = \frac{\sqrt{4x^2 + 2x + 1}}{x + 2}$.

- (a) $y = 4$ and $y = -4$ only.
- (b) $y = 2$ and $y = -2$ only.
- (c) $y = -4$ only.
- (d) $y = 4$ only.
- (e) $y = 2$ only.

4.(5 pts.) Find the limit $\lim_{x \rightarrow \infty} \frac{2 \cos x + x}{\cos x + 5x + 10}$.

- (a) 2
- (b) 1/10
- (c) Does not exist
- (d) 1/5
- (e) $+\infty$

Name: _____

Class Time: _____

5.(5 pts.) Let $f(x) = 1 - \frac{1}{x}$. What value $x = c$ on the interval $1 \leq x \leq 4$ will satisfy the Mean Value Theorem?

(a) -2 and 2

(b) $\sqrt{3}/2$

(c) No such value.

(d) $1/2$

(e) 2

6.(5 pts.) Find the limit $\lim_{x \rightarrow \infty} \frac{\sin(2x^7 + 7x^3 + 3)}{\sqrt{x+1}}$.

(a) Does not exist

(b) 7

(c) 0

(d) $+\infty$

(e) 2

Name: _____

Class Time: _____

7.(5 pts.) Find the absolute maximum and absolute minimum of the function

$$f(x) = 3x^{2/3} + 2x - 1$$

for x in $[-1, 8]$.

- (a) Absolute maximum = 3 and Absolute minimum = 0
- (b) Absolute maximum = 27 and Absolute minimum = 0
- (c) Absolute maximum = 27 and Absolute minimum = -1
- (d) Absolute maximum = 0 and Absolute minimum = -1
- (e) Absolute maximum = 3 and Absolute minimum = 2

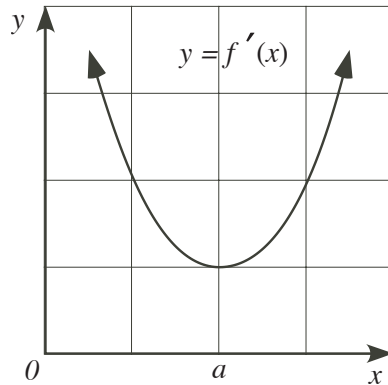
8.(5 pts.) If $s(t)$ represents weekly sales of a product, $s(10) = 20$, $s'(10) = 0$, and $s''(t) > 0$ for all t , which of the following statements is possibly **TRUE**? (only one of them is true)

- (a) The rate of sales were decreasing after the 10th week
- (b) The sales were decreasing after the 10th week
- (c) The sales were increasing before the 10th week
- (d) The sales reached a maximum at 10th week
- (e) The sales bottomed out (reached a minimum) at 10th week

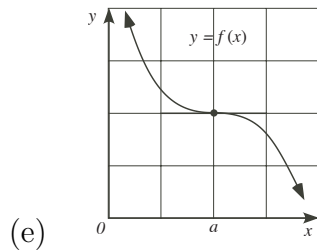
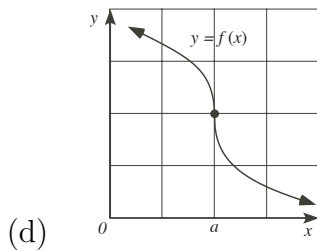
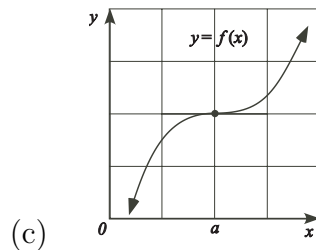
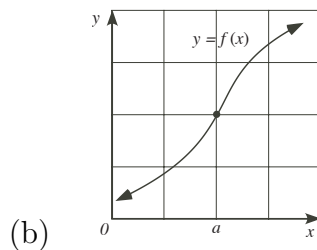
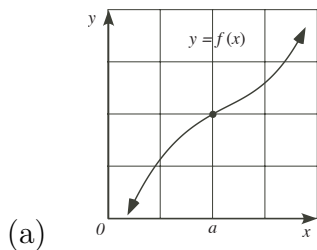
Name: _____

Class Time: _____

9.(5 pts.) The graph of the **derivative** $f'(x)$ of $f(x)$ is given below.



Which of the following best describe the graph of $y = f(x)$?



10.(5 pts.) Find the equations of all **horizontal** asymptotes of the function

$$y = \frac{5e^{6x} - 2e^{3x} + 4}{2e^{6x} + 3e^{3x} - 2}$$

(a) $y = -2$ and $y = \frac{5}{2}$

(b) $y = -\frac{1}{2}$ and $y = \frac{2}{5}$

(c) $y = -\frac{2}{3}$ and $y = \frac{5}{2}$

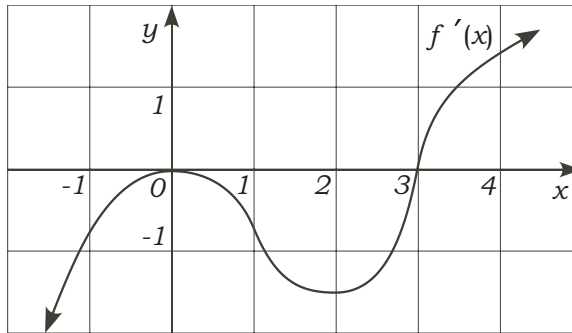
(d) $x = -2$ and $x = \frac{5}{2}$

(e) $x = -\frac{2}{3}$ and $x = \frac{5}{2}$

Name: _____

Class Time: _____

11.(5 pts.) The graph of the **derivative** $f'(x)$ of $f(x)$ is given below.



Derivative of $f(x)$

Which of the following best describe the graph of $y = f(x)$?

- (a) The graph of $f(x)$ is concave downward on the intervals $(-\infty, 1)$ and $(3, \infty)$.
- (b) The graph of $f(x)$ is concave upward on the intervals $(0, 2)$ ONLY.
- (c) The graph of $f(x)$ is concave upward on the intervals $(-\infty, 0)$ and $(2, \infty)$.
- (d) The graph of $f(x)$ is concave downward on the intervals $(-\infty, 0)$ and $(2, \infty)$.
- (e) The graph of $f(x)$ is concave upward on the intervals $(1, 3)$ ONLY.

12.(5 pts.) Find all point(s) of inflection for $f(x)$, whose **second order derivative** is given by $f''(x) = (x - 1)(x - 3)^2(x - 5)^3$.

- (a) $x = 5$ only
- (b) $x = 3$ only
- (c) $x = 1$ only
- (d) $x = 1, x = 3$ and $x = 5$
- (e) $x = 1$ and $x = 5$ only

Name: _____

Class Time: _____

Partial Credit

You must show your work on the partial credit problems to receive credit!

13.(12 pts.) Consider the a cylinder **closed** on both ends with surface area 54π m².

(a) Write down the volume $V(r)$ in terms of the radius r of the cylinder.

You may use the formulas: $\pi r^2 h$ and $2\pi r h$.

(b) Write down the range of the possible values of r . **Answer:** _____

(c) Using calculus, find the largest volume that such a cylinder could enclose.

Name: _____

Class Time: _____

14.(12 pts.) Sketch the graph of a function defined on $(-2, \infty)$ in the axes below with the following properties:

(1) $f(0) = 2$ and $f(2) = 0$.

(2) $f(x)$ has a vertical asymptotes at $x = -2$.

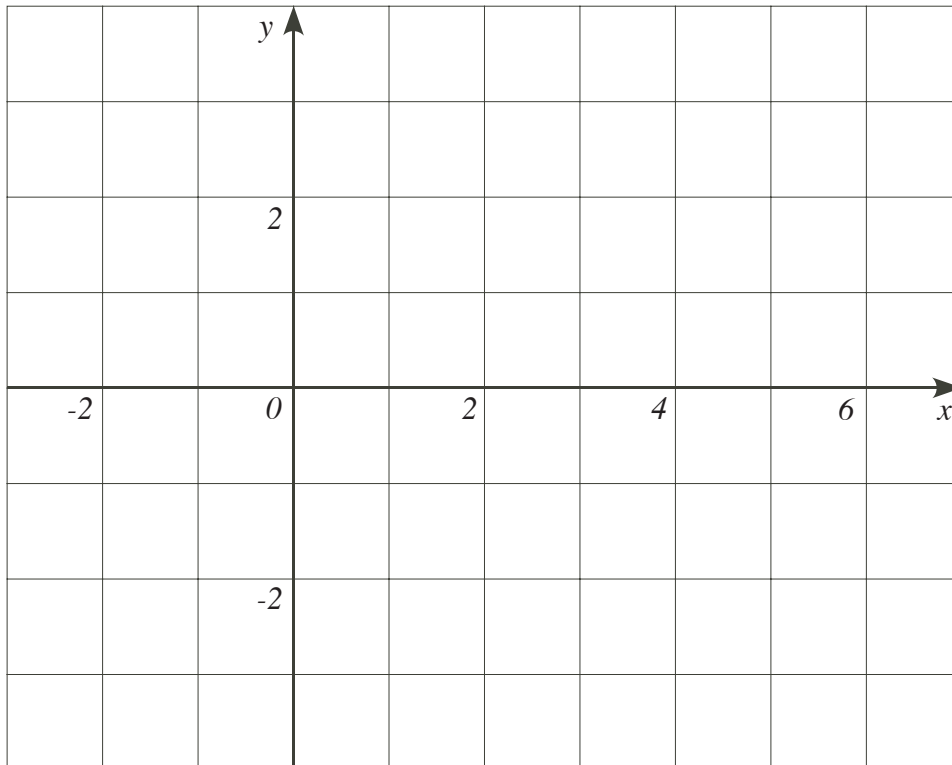
(3) $\lim_{x \rightarrow \infty} f(x) = -2$

(4) $f'(x) > 0$ for $-2 < x < 0$.

(5) $f'(x) < 0$ for $0 < x < +\infty$.

(6) $f''(x) < 0$ for $-2 < x < 2$.

(7) $f''(x) > 0$ for $2 < x < +\infty$.



Name: _____

Class Time: _____

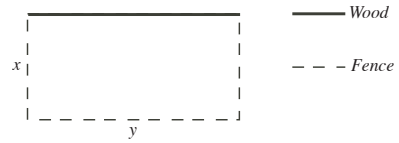
15.(12 pts.) Using calculus, find the point on the graph of $y = 3x + 10$ closest to the origin $(0, 0)$.

Name: _____

Class Time: _____

16.(12 pts.) A farmer wishes to build a rectangular enclosure of area 200 sq. ft. Three sides of the enclosure will be fencing at \$1/ft, while the remaining side is wood at \$3/ft. The plan of the enclosure is given in the figure below.

(a) Write down the cost $C(x)$ in terms of the width x of the enclosure.



(b) Write down the range of the possible values of x . **Answer:** _____

(c) Using calculus, find the dimensions of the enclosure that minimized the cost C . You must give reason why your answers makes C minimum.

Math 10350: Calculus A
Exam III Sample
November 18, 2018

Name: _____

Class Time: ANSWERS

- The Honor Code is in effect for this examination. All work is to be your own.
- No calculators.
- The exam lasts for one hour and 15 minutes.
- Be sure that your name is on every page in case pages become detached.
- Be sure that you have all 11 pages of the test.

Sign the pledge. “On my honor, I have neither given nor received unauthorized aid on this Exam”:

Good Luck!

PLEASE MARK YOUR ANSWERS WITH AN X, not a circle!

1.	<input type="checkbox"/> a	<input type="checkbox"/> b	<input type="checkbox"/> c	<input type="checkbox"/> d	<input checked="" type="checkbox"/>
2.	<input type="checkbox"/> a	<input checked="" type="checkbox"/>	<input type="checkbox"/> c	<input type="checkbox"/> d	<input type="checkbox"/> e
3.	<input type="checkbox"/> a	<input checked="" type="checkbox"/>	<input type="checkbox"/> c	<input type="checkbox"/> d	<input type="checkbox"/> e
4.	<input type="checkbox"/> a	<input type="checkbox"/> b	<input type="checkbox"/> c	<input checked="" type="checkbox"/>	<input type="checkbox"/> e
5.	<input type="checkbox"/> a	<input type="checkbox"/> b	<input type="checkbox"/> c	<input type="checkbox"/> d	<input checked="" type="checkbox"/>
6.	<input type="checkbox"/> a	<input type="checkbox"/> b	<input checked="" type="checkbox"/>	<input type="checkbox"/> d	<input type="checkbox"/> e
7.	<input type="checkbox"/> a	<input type="checkbox"/> b	<input checked="" type="checkbox"/>	<input type="checkbox"/> d	<input type="checkbox"/> e
8.	<input type="checkbox"/> a	<input type="checkbox"/> b	<input type="checkbox"/> c	<input type="checkbox"/> d	<input checked="" type="checkbox"/>
9.	<input checked="" type="checkbox"/>	<input type="checkbox"/> b	<input type="checkbox"/> c	<input type="checkbox"/> d	<input type="checkbox"/> e
10.	<input checked="" type="checkbox"/>	<input type="checkbox"/> b	<input type="checkbox"/> c	<input type="checkbox"/> d	<input type="checkbox"/> e
11.	<input type="checkbox"/> a	<input type="checkbox"/> b	<input checked="" type="checkbox"/>	<input type="checkbox"/> d	<input type="checkbox"/> e
12.	<input type="checkbox"/> a	<input type="checkbox"/> b	<input type="checkbox"/> c	<input type="checkbox"/> d	<input checked="" type="checkbox"/>

Please do NOT write in this box.

Multiple Choice _____

13. _____

14. _____

15. _____

16. _____

Total _____

Math 10350: Calculus A
Exam III
November 17, 2019

Name: _____
Class Time: _____

- The Honor Code is in effect for this examination. All work is to be your own.
- No calculators.
- The exam lasts for one hour and 15 minutes.
- Be sure that your name is on every page in case pages become detached.
- Be sure that you have all 11 pages of the test.

Sign the pledge. “On my honor, I have neither given nor received unauthorized aid on this Exam”:

Good Luck!

PLEASE MARK YOUR ANSWERS WITH AN X, not a circle!					
1.	<input type="checkbox"/> a	<input type="checkbox"/> b	<input type="checkbox"/> c	<input type="checkbox"/> d	<input type="checkbox"/> e
2.	<input type="checkbox"/> a	<input type="checkbox"/> b	<input type="checkbox"/> c	<input type="checkbox"/> d	<input type="checkbox"/> e
3.	<input type="checkbox"/> a	<input type="checkbox"/> b	<input type="checkbox"/> c	<input type="checkbox"/> d	<input type="checkbox"/> e
4.	<input type="checkbox"/> a	<input type="checkbox"/> b	<input type="checkbox"/> c	<input type="checkbox"/> d	<input type="checkbox"/> e
5.	<input type="checkbox"/> a	<input type="checkbox"/> b	<input type="checkbox"/> c	<input type="checkbox"/> d	<input type="checkbox"/> e
6.	<input type="checkbox"/> a	<input type="checkbox"/> b	<input type="checkbox"/> c	<input type="checkbox"/> d	<input type="checkbox"/> e
7.	<input type="checkbox"/> a	<input type="checkbox"/> b	<input type="checkbox"/> c	<input type="checkbox"/> d	<input type="checkbox"/> e
8.	<input type="checkbox"/> a	<input type="checkbox"/> b	<input type="checkbox"/> c	<input type="checkbox"/> d	<input type="checkbox"/> e
9.	<input type="checkbox"/> a	<input type="checkbox"/> b	<input type="checkbox"/> c	<input type="checkbox"/> d	<input type="checkbox"/> e
10.	<input type="checkbox"/> a	<input type="checkbox"/> b	<input type="checkbox"/> c	<input type="checkbox"/> d	<input type="checkbox"/> e
11.	<input type="checkbox"/> a	<input type="checkbox"/> b	<input type="checkbox"/> c	<input type="checkbox"/> d	<input type="checkbox"/> e

Please do NOT write in this box.	
Multiple Choice	_____
12.	_____
13.	_____
14.	_____
15.	_____
Total	_____

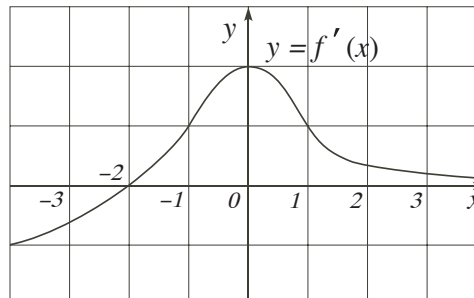
Name: _____

Class Time: _____

Multiple Choice

1.(5 pts.) The graph of the **derivative** $f'(x)$ of $f(x)$ for $-4 < x < 4$ is given below. Find the values of x in $(-4, 4)$ for which $f(x)$ is **concave up**.

- (a) $(-4, -1) \cup (1, 4)$
- (b) $(0, 4)$
- (c) $(-1, 1)$
- (d) $(-2, 4)$
- (e) $(-4, 0)$



Graph of the Derivative

2.(5 pts.) For the same function $f(x)$ above, which of the following statements is **TRUE**?

- (a) $f(x)$ has a local minimum at $x = -2$.
- (b) $f(x)$ has a local minimum at $x = 0$.
- (c) $f(x)$ has a local maximum at $x = -2$.
- (d) $f(x)$ has a local maximum at $x = 1$.
- (e) $f(x)$ has a local maximum at $x = 0$.

Name: _____

Class Time: _____

3.(5 pts.) Find all horizontal asymptote(s) for $f(x) = \frac{2x^3 + x^2 + 1}{\sqrt{3x^6 + 7x^3 - 11x + 2}}$

(a) $y = \frac{2}{\sqrt{3}}$ only

(b) $y = 0$ only

(c) $y = -\frac{2}{\sqrt{3}}$ only

(d) $y = \frac{2}{\sqrt{3}}$ and $y = -\frac{2}{\sqrt{3}}$

(e) There is no horizontal asymptote

4.(5 pts.) Find the value $\lim_{x \rightarrow \infty} x^{1/x}$.

Hint: You will need to use log and exponential functions.

(a) Does not exist.

(b) 1

(c) 0

(d) e

(e) $+\infty$

Name: _____

Class Time: _____

5.(5 pts.) Find all **vertical** asymptotes of the function $y = \frac{x - 2}{x^2 + x - 6}$

- (a) $x = 2$
- (b) $x = 3$
- (c) $x = -3$
- (d) $x = -3$ and $x = 2$
- (e) $x = -2$ and $x = 3$

6.(5 pts.) A piece of wire 30 meter long is cut into two pieces. One piece is bent into a square and the other is bent into an equilateral triangle. If x is the length of the wire bent into a square, which of the following functions below represents the total area enclosed by both the square and equilateral triangle

- (a) $\frac{x^2}{4} + \frac{(30 - x)^2\sqrt{3}}{9}$
- (b) $\frac{x^2}{16} + \frac{(30 - x)^2}{27}$
- (c) $\frac{x^2}{16} + \frac{(30 - x)^2\sqrt{3}}{36}$
- (d) $\frac{x^2}{16} + \frac{(30 - x)^2}{54}$
- (e) $\frac{x^2}{16} + \frac{(30 - x)^2\sqrt{3}}{9}$

Name: _____

Class Time: _____

7.(5 pts.) Suppose $f(x)$ is a function defined for all values of x such that its **second derivative** is

$$f''(x) = x^3 - 4x^2.$$

Find all values of x for which $f(x)$ has an inflection point.

- (a) $x = 0$ and $x = 4$
- (b) No such value exist.
- (c) $x = 0$ and $x = 8/3$.
- (d) $x = 0$ only.
- (e) $x = 4$ only.

8.(5 pts.) If the derivative of $g(x)$ is given by $g'(x) = \frac{x-2}{x+2}$, find the values of x for which $g(x)$ is **increasing**.

- (a) $(-2, 2)$ only.
- (b) $(-\infty, -2) \cup (2, \infty)$ only.
- (c) $(-\infty, -2)$ only.
- (d) For all real values except $x = 2$.
- (e) $(2, \infty)$ only.

Name: _____

Class Time: _____

9.(5 pts.) Find the value of $\lim_{x \rightarrow -\infty} \frac{2x}{\sqrt{x^2 + 2x + 2}}$.

- (a) 2
- (b) -2
- (c) -1
- (d) 0
- (e) 1

10.(5 pts.) Let $f(x) = \frac{1}{x}$. Find all values $x = c$ in the interval $2 \leq x \leq 4$ that satisfy the Mean Value Theorem.

- (a) -2 and 2
- (b) 2
- (c) 3
- (d) $\sqrt{8}$
- (e) $-\sqrt{8}$ and $\sqrt{8}$

Name: _____

Class Time: _____

11.(5 pts.) Suppose $x = 1$ is a critical point of $f(x)$ such that $f'(1) = 0$, and

$$f''(x) = 3x^2 - x.$$

Using second derivative test, which of one of the following statements could you conclude?

- (a) $f(x)$ has a **global maximum** at $x = 1$.
- (b) $f(x)$ has a **global minimum** at $x = 1$.
- (c) $f(x)$ is **increasing** at $x = 1$.
- (d) $f(x)$ has a **local maximum** at $x = 1$.
- (e) $f(x)$ has a **local minimum** at $x = 1$.

Name: _____

Class Time: _____

Partial Credit

You must show your work on the partial credit problems to receive credit!

12.(12 pts.) Find the absolute maximum and absolute minimum of the function

$$f(x) = e^{-x^2+2x}$$


on the interval $-1 \leq x \leq 2$.

Name: _____

Class Time: _____

13.(12 pts.) **Part (A)** Sketch the graph of a function in the axes below with the following properties:

- (1) $f(0) = 0$
- (2) $f(x)$ has vertical asymptotes at $x = -2$ and $x = 2$.
- (3) $\lim_{x \rightarrow -\infty} f(x) = 2 = \lim_{x \rightarrow \infty} f(x)$
- (4) $f'(x) > 0$ for all values of x except -2 and 2 .
- (5) $f''(x) > 0$ for $-\infty < x < -2$ and $0 < x < 2$.
- (6) $f''(x) < 0$ for $-2 < x < 0$ and $2 < x < \infty$.



Part (B) The **derivative** of a function $g(x)$ is given by:

$$g'(x) = \frac{x - 2}{x - 1}$$

For what values of x is $g(x)$ concave up? what about concave down?

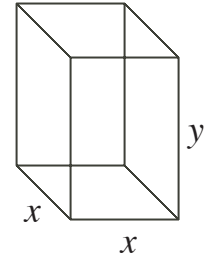
Answer: Concave up on _____; Concave down on _____

Name: _____

Class Time: _____

14.(12 pts.) A **closed** rectangular box with square based is such that its volume is 8 m^3 . If the dimensions of the base is $x \times x$, and the height of the box is y , answer the question below.

(a) Write down the total surface area $A(x)$ in terms of the width x of the box.



(b) Write down the range of the possible values of x . **Answer:** _____

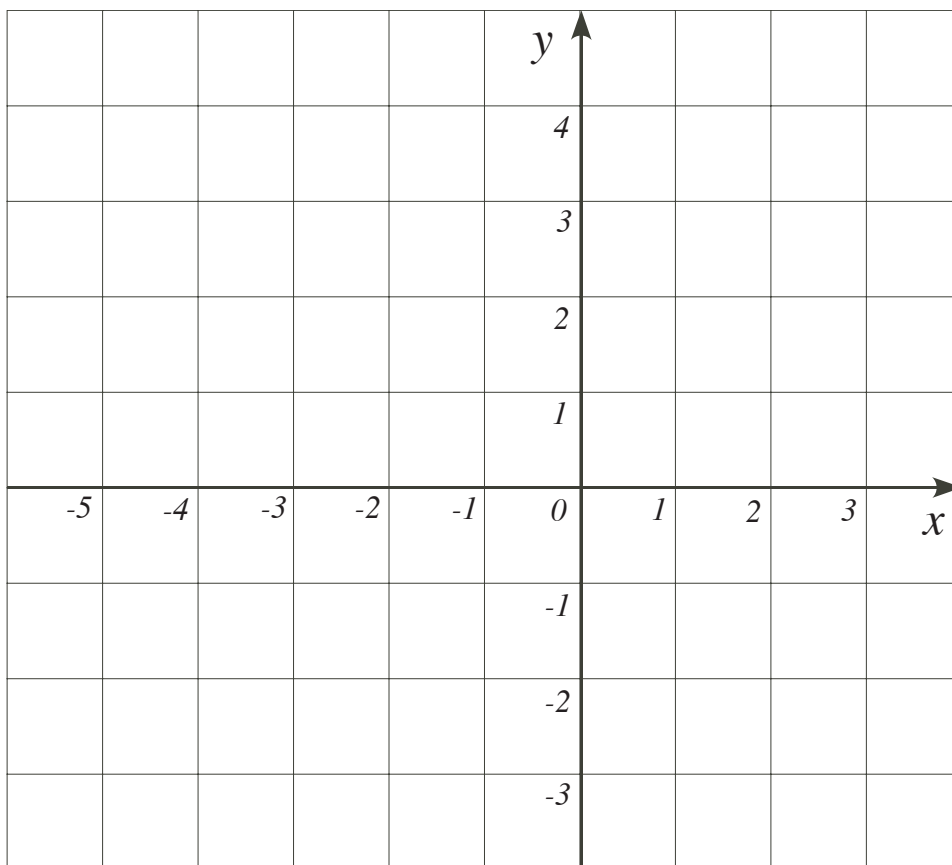
(c) Using calculus, find the value of x that minimizes the area A of the box. You must give reason why your answer makes A minimum.

Name: _____

Class Time: _____

15.(12 pts.) Sketch the graph of a **differentiable** function defined on $(-\infty, 2)$ in the axes below with the following properties:

- (1) $f(0) = 0$ and $f(-2) = 2$.
- (2) $f(x)$ has a vertical asymptotes at $x = 2$.
- (3) $\lim_{x \rightarrow -\infty} f(x) = 4$
- (4) $f'(0) = 0$.
- (5) $f'(x) < 0$ for $(-\infty, 0) \cup (0, 2)$.
- (6) $f''(x) < 0$ for $(-\infty, -2) \cup (0, 2)$.
- (7) $f''(x) > 0$ for $(-2, 0)$.



Math 10350: Calculus A
Exam III
November 17, 2019

Name: _____
Class Time: ANSWERS

- The Honor Code is in effect for this examination. All work is to be your own.
- No calculators.
- The exam lasts for one hour and 15 minutes.
- Be sure that your name is on every page in case pages become detached.
- Be sure that you have all 11 pages of the test.

Sign the pledge. “On my honor, I have neither given nor received unauthorized aid on this Exam”:

Good Luck!

PLEASE MARK YOUR ANSWERS WITH AN X, not a circle!					
1.	<input type="checkbox"/> a	<input type="checkbox"/> b	<input type="checkbox"/> c	<input type="checkbox"/> d	<input checked="" type="checkbox"/>
2.	<input checked="" type="checkbox"/>	<input type="checkbox"/> b	<input type="checkbox"/> c	<input type="checkbox"/> d	<input type="checkbox"/> e
3.	<input type="checkbox"/> a	<input type="checkbox"/> b	<input type="checkbox"/> c	<input checked="" type="checkbox"/>	<input type="checkbox"/> e
4.	<input type="checkbox"/> a	<input checked="" type="checkbox"/>	<input type="checkbox"/> c	<input type="checkbox"/> d	<input type="checkbox"/> e
5.	<input type="checkbox"/> a	<input type="checkbox"/> b	<input checked="" type="checkbox"/>	<input type="checkbox"/> d	<input type="checkbox"/> e
6.	<input type="checkbox"/> a	<input type="checkbox"/> b	<input checked="" type="checkbox"/>	<input type="checkbox"/> d	<input type="checkbox"/> e
7.	<input type="checkbox"/> a	<input type="checkbox"/> b	<input type="checkbox"/> c	<input type="checkbox"/> d	<input checked="" type="checkbox"/>
8.	<input type="checkbox"/> a	<input checked="" type="checkbox"/>	<input type="checkbox"/> c	<input type="checkbox"/> d	<input type="checkbox"/> e
9.	<input type="checkbox"/> a	<input checked="" type="checkbox"/>	<input type="checkbox"/> c	<input type="checkbox"/> d	<input type="checkbox"/> e
10.	<input type="checkbox"/> a	<input type="checkbox"/> b	<input type="checkbox"/> c	<input checked="" type="checkbox"/>	<input type="checkbox"/> e
11.	<input type="checkbox"/> a	<input type="checkbox"/> b	<input type="checkbox"/> c	<input type="checkbox"/> d	<input checked="" type="checkbox"/>

Please do NOT write in this box.

Multiple Choice _____

12. _____

13. _____

14. _____

15. _____

Total _____

Nov 18, 2018

Sample Exam
Answer Key

Name: _____

Class Time: _____

Partial Credit

You must show your work on the partial credit problems to receive credit!

13.(12 pts.) Consider the a cylinder **closed** on both ends with surface area 54π m².

(a) Write down the volume $V(r)$ in terms of the radius r of the cylinder.

You may use the formulas: $\pi r^2 h$ and $2\pi r h$.

$$SA = 2\pi r h + 2\pi r^2 = 54\pi$$

$$r h + r^2 = 27$$

$$h + r = \frac{27}{r}$$

$$h = \frac{27}{r} - r$$

$$V = \pi r^2 h$$

$$= \pi r^2 \left(\frac{27}{r} - r \right)$$

$$V(r) = 27\pi r - \pi r^3$$

$$0 < r \leq \sqrt{27}$$

(b) Write down the range of the possible values of r . Answer: ~~XXXXXXXXXXXXXXXX~~

(c) Using calculus, find the largest volume that such a cylinder could enclose.

$$V' = 27\pi - 3\pi r^2$$

$$V' = 0 \quad \text{if} \quad 27\pi = 3\pi r^2$$

$$9 = r^2$$

$$r = 3$$

($r = -3$ not needed)

$$V(3) = 27\pi(3) - \pi(3)^3 = 81\pi - 27\pi = 54\pi$$

Endpoints:

$$V(\sqrt{27}) = 27\pi(\sqrt{27}) - \pi(\sqrt{27})^3 = 0$$

$$\lim_{r \rightarrow 0} V(r) = \lim_{r \rightarrow 0} 27\pi r - \pi r^3 = 0 - 0 = 0$$

8

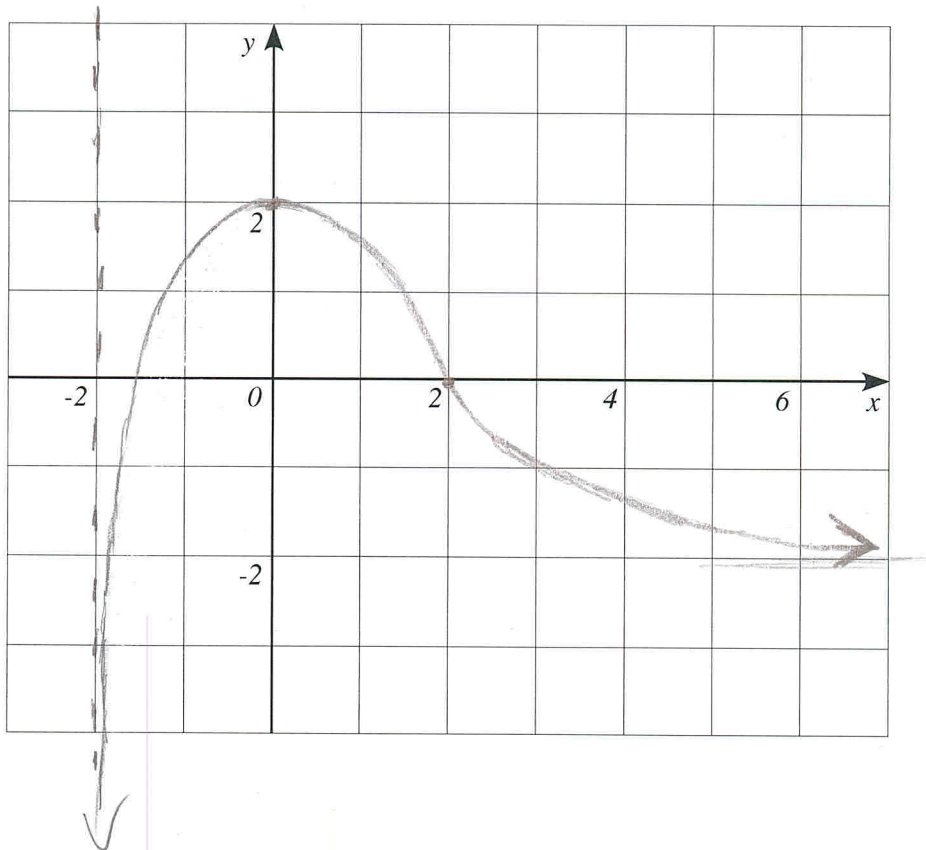
so 54π is the maximum volume

Name: _____

Class Time: _____

14.(12 pts.) Sketch the graph of a function defined on $(-2, \infty)$ in the axes below with the following properties:

- (1) $f(0) = 2$ and $f(2) = 0$.
- (2) $f(x)$ has a vertical asymptotes at $x = -2$.
- (3) $\lim_{x \rightarrow \infty} f(x) = -2$
- (4) $f'(x) > 0$ for $-2 < x < 0$.
- (5) $f'(x) < 0$ for $0 < x < +\infty$.
- (6) $f''(x) < 0$ for $-2 < x < 2$.
- (7) $f''(x) > 0$ for $2 < x < +\infty$.



Name: _____

Class Time: _____

15. (12 pts.) Using calculus, find the point on the graph of $y = 3x + 10$ closest to the origin $(0, 0)$.

Constraint: $y = 3x + 10$

to minimize the function

$$d = \sqrt{x^2 + y^2},$$

we instead minimize

$D = x^2 + y^2$, because they will achieve their mins at the same location.

$$\begin{aligned} D &= x^2 + y^2 \\ &= x^2 + (3x + 10)^2 \\ &= x^2 + 9x^2 + 60x + 100 \\ &= 10x^2 + 60x + 100 \end{aligned}$$

$$D'(x) = 20x + 60$$

$$\begin{aligned} D'(x) = 0 \quad \text{if} \quad 20x &= -60 \\ x &= -3 \end{aligned}$$

if $x < -3$ then $20x < -60$, so $D'(x) < 0$

if $x > -3$ then $20x > -60$ so $D'(x) > 0$

so by the first derivative test, $x = -3$ is the minimum

so the point closest to the origin is

10 $x = -3$ $y = 3(-3) + 10 = 1$

$$\boxed{(-3, 1)}$$

Name: _____


Class Time: _____

16. (12 pts.) A farmer wishes to build a rectangular enclosure of area 200 sq. ft. Three sides of the enclosure will be fencing at \$1/ft, while the remaining side is wood at \$3/ft. The plan of the enclosure is given in the figure below.

(a) Write down the cost $C(x)$ in terms of the width x of the enclosure.

Constraint:

$$xy = 200 \quad y = \frac{200}{x}$$



Cost

$$C = x + x + y + 3y = 2x + 4y = \boxed{2x + \frac{800}{x}}$$

(b) Write down the range of the possible values of x . **Answer:** $0 < x < \infty$

(c) Using calculus, find the dimensions of the enclosure that minimized the cost C . You must give reason why your answers makes C minimum.

$$C'(x) = 2 - \frac{800}{x^2}$$

$$C'(x) = 0 \quad \text{if} \quad 2 = \frac{800}{x^2}$$

$$2x^2 = 800$$

$$x^2 = 400$$

$$x = 20 \quad (\text{don't need } x = -20)$$

if $0 < x < 20$, then $x^2 < 400$, so $\frac{800}{x^2} > \frac{800}{400} = 2$

$$\text{so } C'(x) < 0$$

if $x > 20$, then $x^2 > 400$, so $\frac{800}{x^2} < \frac{800}{400} = 2$

$$\text{so } C'(x) > 0$$

so by the first derivative test, the cost is minimized at $x = 20$.

$$\boxed{x = 20, y = \frac{200}{20} = 10}$$

Name: _____

Class Time: _____

Partial Credit

You must show your work on the partial credit problems to receive credit!

12.(12 pts.) Find the absolute maximum and absolute minimum of the function

$$f(x) = e^{-x^2+2x}$$

on the interval $-1 \leq x \leq 2$.

$$f'(x) = (-2x+2)e^{-x^2+2x}$$

$$f'(x) = 0 \rightarrow (-2x+2)e^{-x^2+2x} = 0$$

since e^{-x^2+2x} is never 0, we must have $-2x+2=0 \rightarrow x=1$

critical points: 1

end points: -1, 2

$$f(1) = e \rightarrow \text{absolute maximum}$$

$$f(-1) = e^{-3} \rightarrow \text{absolute minimum}$$

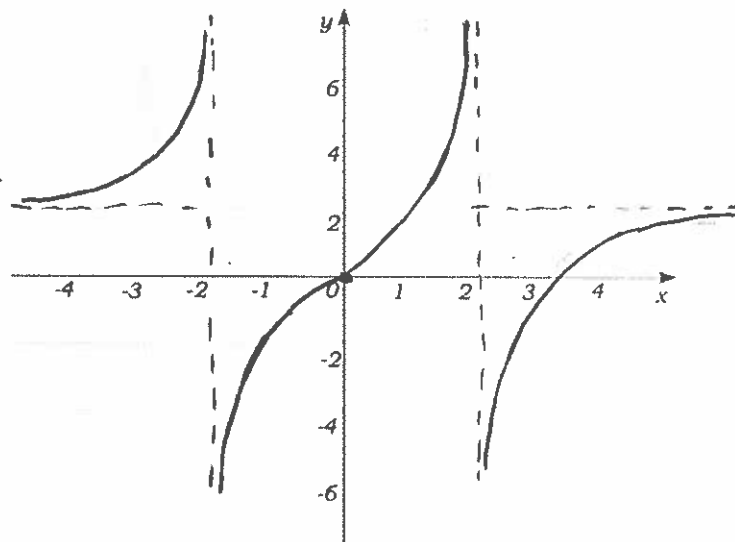
$$f(2) = 1$$

Name: _____

Class Time: _____

13. (12 pts.) Part (A) Sketch the graph of a function in the axes below with the following properties:

- (1) $f(0) = 0$
- (2) $f(x)$ has vertical asymptotes at $x = -2$ and $x = 2$.
- (3) $\lim_{x \rightarrow -\infty} f(x) = 2 = \lim_{x \rightarrow \infty} f(x)$
- (4) $f'(x) > 0$ for all values of x except -2 and 2 .
- (5) $f''(x) > 0$ for $-\infty < x < -2$ and $0 < x < 2$.
- (6) $f''(x) < 0$ for $-2 < x < 0$ and $2 < x < \infty$.



Part (B) The derivative of a function $g(x)$ is given by:

$$g'(x) = \frac{x-2}{x-1}$$

For what values of x is $g(x)$ concave up? what about concave down?

$$g''(x) = \frac{(x-1) - (x-2)}{(x-1)^2} = \frac{\cancel{x} - 1 - \cancel{x} + 2}{(x-1)^2} = \frac{1}{(x-1)^2}$$

$$g''(x) > 0 \text{ for every } x \neq 1$$

Answer: Concave up on $(-\infty, 1) \cup (1, \infty)$;

Concave down on \emptyset

Name: _____

Class Time: _____

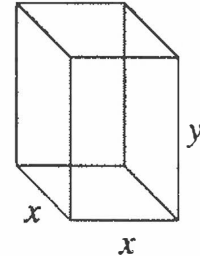
14. (12 pts.) A closed rectangular box with square based is such that its volume is 8 m^3 . If the dimensions of the base is $x \times x$, and the height of the box is y , answer the question below.

(a) Write down the total surface area $A(x)$ in terms of the width x of the box.

$$V = x^2 y, \quad V = 8 \rightarrow x^2 y = 8 \rightarrow y = \frac{8}{x^2}$$

$$A = 2x^2 + 4xy$$

$$A = 2x^2 + 4x\left(\frac{8}{x^2}\right) = 2x^2 + \frac{32}{x}$$



(b) Write down the range of the possible values of x . Answer: $(0, \infty)$

(c) Using calculus, find the value of x that minimizes the area A of the box. You must give reason why your answer makes A minimum.

$$A' = 4x - \frac{32}{x^2}$$

$$A' = 0 \rightarrow 4x - \frac{32}{x^2} = 0 \rightarrow 4x = \frac{32}{x^2} \rightarrow 4x^3 = 32$$

$$\rightarrow x^3 = 8 \rightarrow x = 2$$

$$A' = 4x - \frac{32}{x^2} = \frac{4x^3 - 32}{x^2} = \frac{4(x^3 - 8)}{x^2}$$

x	0		2	
A'	not defined	-	0	+
A				

local min

$$\lim_{x \rightarrow 0^+} A(x) = \infty$$

$$\lim_{x \rightarrow \infty} A(x) = \infty$$

So $A(2)$ is the global min.

Name: _____

Class Time: _____

15.(12 pts.) Sketch the graph of a **differentiable** function defined on $(-\infty, 2)$ in the axes below with the following properties:

- (1) $f(0) = 0$ and $f(-2) = 2$.
- (2) $f(x)$ has a vertical asymptotes at $x = 2$.
- (3) $\lim_{x \rightarrow -\infty} f(x) = 4$
- (4) $f'(0) = 0$.
- (5) $f'(x) < 0$ for $(-\infty, 0) \cup (0, 2)$.
- (6) $f''(x) < 0$ for $(-\infty, -2) \cup (0, 2)$.
- (7) $f''(x) > 0$ for $(-2, 0)$.

